



# D.A.V. PUBLIC SCHOOL

## NH-3, NIT. FARIDABAD

SESSION: 2024 - 2025

ASSIGNMENTS

CLASS: III

**“In our class we don’t do easy. We make easy happen through hard working and learning.”**



Email Id : [davnh3fbd@gmail.com](mailto:davnh3fbd@gmail.com)

WebSite : [davnh3school.org.in](http://davnh3school.org.in)

**Subject- ENGLISH**  
**Revision Assignment-1**

Q1. Describe your 'Water Bottle' in your own words.

---

---

---

---

---

---

---

---

Q2. Complete the given table with the correct type of noun by using the help box.

girl	Delhi	water bottle	The Taj Mahal	Sia	book	pen	River Ganga
------	-------	--------------	---------------	-----	------	-----	-------------

Common noun	Proper noun

Q3. Name them.

- a) Who peered into the cage \_\_\_\_\_
- b) Who came to see Molly everyday \_\_\_\_\_
- c) What did Somu's father gifted him \_\_\_\_\_

Q4. Fill in the blanks with correct Subject Verb Agreement (is/am/are/was/were)

- a) Where \_\_\_\_\_ you going with your brother?
- b) I \_\_\_\_\_ reading a book.
- c) She \_\_\_\_\_ absent yesterday.
- d) We \_\_\_\_\_ going for dinner last evening.

Q5. Fill the missing words to make the opposite of the given words.

- a) h\_\_ p p \_\_\_\_ - sad
- b) c l \_\_ a \_\_\_\_ - dirty

c) c \_\_\_ g \_\_\_ - freedom

d) a \_\_\_ \_\_\_ r y - calm

**Q6. Rewrite the sentences using correct Punctuation mark.**

a) we are going to Canada tomorrow

\_\_\_\_\_

b) i like apple banana orange and grapes

\_\_\_\_\_

c) where are you going

\_\_\_\_\_

**Q7. Write the opposite of the following words.**

a) Found- \_\_\_\_\_

b) Sad- \_\_\_\_\_

c) Old- \_\_\_\_\_

**Revision Assignment- 2**

**Q1. Write five lines on the given picture.**



\_\_\_\_\_

\_\_\_\_\_

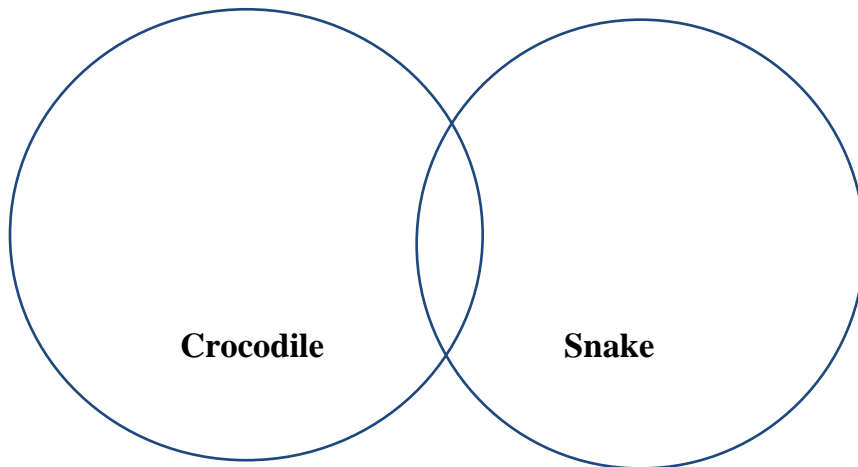
\_\_\_\_\_

\_\_\_\_\_

\_\_\_\_\_

**Q2. Use the Venn diagram and record the similarities and differences between the crocodile and the Snakes.**

Crocodiles are reptiles. That means they lay eggs and are cold- blooded. Crocodiles have long snouts and scaly skin. They use their sharp teeth to hunt and kill. Snakes are also cold-blooded reptiles. They shed their scaly skin as they grow. Snakes do not have teeth. They swallow their food whole. Snakes can lay many eggs at one time.



**Q3. Think of a Proper noun for each Common noun.**

a) girl- \_\_\_\_\_

b) day- \_\_\_\_\_

c) teacher- \_\_\_\_\_

d) school- \_\_\_\_\_

**Q4. Rearrange the jumbled words to make meaningful sentences.**

a) sipped/ some/ water/ the sparrow

\_\_\_\_\_.

b) bakes/ a/ baker/ bread

\_\_\_\_\_.

**Q5. Circle the correct spelling.**

a) jealous      jelous      jalous      jealus

b) sttroked      stroked      stroked      strocked

c) thursty      thirsty      thirsty      thisty

**Q6. Why was Molly in tears?**

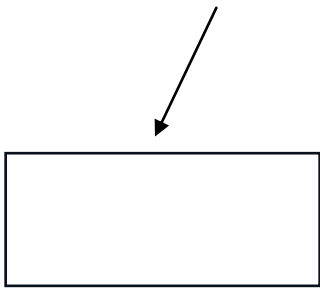

Ans.

---

---

**Q7. Complete the Graphic Organiser.**

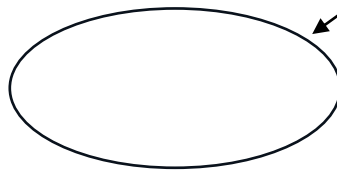
Draw the picture of a canary.



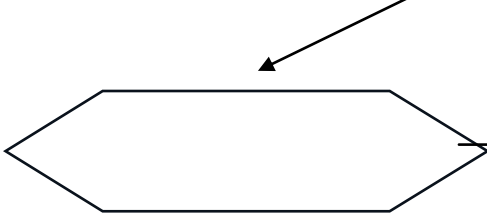
What am I?




Where do I live?



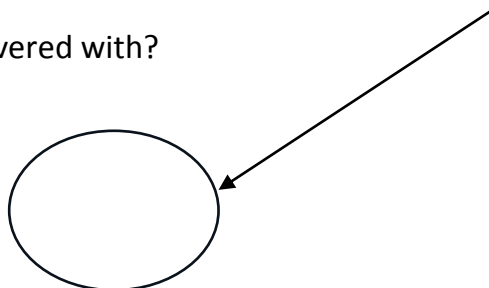
What do I eat?



What am I covered with?



Am I wild or Tamed?



HINDI  
पाठ भोलू भुलक्कड़  
अभ्यास कार्य

प्रश्न 1 दिए गए वर्णों से शब्द बनाइए-

क्क \_\_\_\_\_  
स्त \_\_\_\_\_  
ल्द \_\_\_\_\_  
प्य \_\_\_\_\_  
प्प \_\_\_\_\_

प्रश्न 2 समान लय वाले शब्द लिखिए-

पानी \_\_\_\_\_  
लाए \_\_\_\_\_  
भूल \_\_\_\_\_  
साथ \_\_\_\_\_  
बात \_\_\_\_\_  
आम \_\_\_\_\_

प्रश्न 3 निम्न शब्दों के विपरीत शब्द लिखिए-

दिन \_\_\_\_\_  
पास \_\_\_\_\_  
अपने \_\_\_\_\_  
जल्दी \_\_\_\_\_  
चढ़ना \_\_\_\_\_  
तोड़ना \_\_\_\_\_

प्रश्न 4 पाठ में आए अर्ध व्यंजन वाले शब्द लिखिए-

\_\_\_\_\_

प्रश्न 5 पाठ में से अनुनासिक ( चंद्रबिंदु वाले ) शब्द छोटकर लिखिए-

\_\_\_\_\_

प्रश्न 6 निम्न प्रश्नों के उत्तर एक शब्द में दीजिए-

प्रश्न क रास्ते में कितने मुर्गे आपस में लड़ रहे थे ?

उत्तर \_\_\_\_\_

प्रश्न ख भोलू के सिर पर क्या टपका ?

उत्तर \_\_\_\_\_

प्रश्न ग भोलू बाल्टी लेकर कहाँ गया ?

उत्तर \_\_\_\_\_

प्रश्न घ माँ ने भोलू को कमीज में क्या लगाने के लिए कहा ?

उत्तर \_\_\_\_\_

प्रश्न ङ. माँ ने भोलू को छप्पर से क्या लाने के लिए कहा ?

उत्तर \_\_\_\_\_

प्रश्न च मुँडेर पर भोलू ने क्या देखा ?

उत्तर \_\_\_\_\_

प्रश्न छ भोलू को किसकी बीमारी थी ?

उत्तर \_\_\_\_\_

प्रश्न ज भोलू किसकी तरह अपनी बाँहों को हिलाने लगा ?

उत्तर \_\_\_\_\_

प्रश्न झ माँ ने भोलू को पालक लाने के लिए कहाँ भेजा ?

उत्तर \_\_\_\_\_

प्रश्न 7 दिए गए वाक्यों के सामने सही व गलत का निशान लगाइए-

क आपस में तीन मुर्गे लड़ रहे थे । ( )

ख भोलू को लोग घुमक्कड़ कहते थे । ( )

ग भोलू बस्ता लेकर स्कूल गया । ( )

घ छत पर चिड़िया का घोंसला था । ( )

प्र० 8 निम्न शब्दों के अर्थ लिखकर वाक्य बनाओ -

क किताब \_\_\_\_\_

ख ज़मीन \_\_\_\_\_

प्र09 निम्न शब्दों को शुद्ध रूप में लिखें-

क भुलककड़ \_\_\_\_\_

ख बसता \_\_\_\_\_

प्रश्न 10 दिए गए शब्द से मिलते- जुलते शब्द बनाइए-

अक्कड़ \_\_\_\_\_

प्रश्न 11 अपने पसंदीदा दो फलों और दो सब्जियों के चित्र बनाएं व उनके एक-एक गुण लिखिए-

### पाठ भारत देश

प्रश्न 1 दिए गए शब्दों की सहायता से कविता पंक्तियां पूरी कीजिए-

जान , उत्सव , बढ़ते , झुकने ,गंगा सरताज ,वादा , देशों ,शान, संगम ,हिमालय

भारत देश हमारा है

हमें \_\_\_\_\_ जान से प्यारा है

दुनिया का \_\_\_\_\_ है ये,

यह \_\_\_\_\_ से न्यारा है ॥

गंगा \_\_\_\_\_ नदियां हैं बहती

\_\_\_\_\_ सा पर्वत है ।



भिन्न संस्कृति, भिन्न है \_\_\_\_\_,  
यहाँ भाषाओं का \_\_\_\_\_ है ॥  
हम सब ये \_\_\_\_\_ करते हैं,  
हम आगे \_\_\_\_\_ जाएंगे।  
कभी न \_\_\_\_\_ देंगे इसको ,  
हम इसकी \_\_\_\_\_ बढ़ाएंगे॥

प्रश्न 2 निम्न शब्दों के समान अर्थ लिखिए-

देश \_\_\_\_\_  
दुनिया \_\_\_\_\_  
सरताज \_\_\_\_\_  
पर्वत \_\_\_\_\_  
भिन्न \_\_\_\_\_

प्रश्न 3 उत्तर भारत की दो नदियों के नाम लिखिए -

\_\_\_\_\_

प्रश्न 4 निम्न प्रश्नों के उत्तर दीजिए -

प्र० क हमारे देश का नाम क्या है ?

30 \_\_\_\_\_

प्र० ख हमारे देश में कौन-कौन सी नदियाँ बहती हैं ?

30 \_\_\_\_\_

प्र० ग हमारा देश किसका सरताज है ?

30 \_\_\_\_\_

### दीर्घ प्रश्न

प्रश्न 1 हमारा देश अन्य देशों से अलग कैसे है ?

30 \_\_\_\_\_

प्रश्न 2 नदियों का हमारे जीवन में क्या महत्व है हम अपने देश को कैसे आगे बढ़ा सकते हैं?

30

गिनती 1-10

अभ्यास कार्य

निम्न अंग्रेजी संख्याओं को हिंदी में अंकों व शब्दों में लिखिए -

संख्या	अंकों	शब्दों
5	_____	_____
8	_____	_____
6	_____	_____
7	_____	_____
1	_____	_____
3	_____	_____
9	_____	_____

### बहुविकल्पीय प्रश्न

- 1 . निम्न में से 9 का शुद्ध रूप शब्द कौन सा है?  
क) नौ      ख) नो
- 2 . निम्न में से 5 का शुद्ध रूप शब्द कौन सा है?  
क) पाच      ख) पाँच
- 3 . निम्न में से का शुद्ध रूप शब्द कौन सा है?  
क) छह      ख) छाह
- 4 . निम्न में से 7 का शुद्ध रूप शब्द कौन सा है?  
क) सत      ख) सात

## SCIENCE

### Q 1 Fill in the blanks

- a. The salivary glands secret \_\_\_\_\_.
- b. The \_\_\_\_\_ helps us to feel ice is cold.
- c. Our tongue has different parts which are sensitive to different \_\_\_\_\_.
- d. Our nose helps us to \_\_\_\_\_ different type of fragrance.
- e. Skin helps us to \_\_\_\_\_ by touch.
- f. Our tongue can have around \_\_\_\_\_ to \_\_\_\_\_ taste buds.
- g. Our tongue is the \_\_\_\_\_ muscle in our body.
- h. The average length of the human tongue is \_\_\_\_\_.
- i. The largest organ of the body is the \_\_\_\_\_

### Q 2. Name the kind of sense organ used

1.the colours of rainbow.

2. chirping of birds

3.beautiful picture

4 . Tea is hot

5.ice cream is sweet

**Q 3 Multiple choice questions**

**A. We should mediate and exercise \_\_\_\_\_**

**a) Regularly b) occasionally c) at intervals d) none of the above.**

**B. The sense organ which helps us to find pleasant and unpleasant smell is**

**a) Ears b) Eyes c) Nose d) Tongue**

**C. The sense organ that helps to hear musical sounds.**

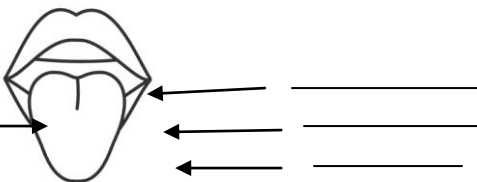
**a) Skin b) Eyes c) Nose d) Ears**

**Q 4 Complete it**

**a. Nose: smell:: Eyes: \_\_\_\_\_**

**b. Ears: hear :: Skin : \_\_\_\_\_**

**Q 5. Identify and label the given diagram**



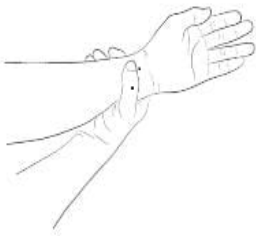
Name the sense organ \_\_\_\_\_

Name the sense organ \_\_\_\_\_

**Q6 write True/False**

1. We should eat too hot and too cold things. \_\_\_\_\_
2. We should never poke our eyes, nose or ears with any pointed objects.  
\_\_\_\_\_
3. We can find out the colour of a leaf by just touching it. \_\_\_\_\_
4. Our body has many organs. \_\_\_\_\_
5. We do not get the feeling of pain when we are injured. \_\_\_\_\_


**Q 7 Identify the organs**



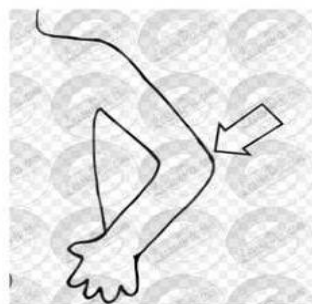
\_\_\_\_\_



\_\_\_\_\_



\_\_\_\_\_



\_\_\_\_\_

**Q 8 Edit the following statements**

1. There are seven types of sense organs. \_\_\_\_\_

2. Garbage usually smells good. \_\_\_\_\_
3. Loud sounds are useful for ears \_\_\_\_\_
4. Our tongue has 4000 taste buds. \_\_\_\_\_
5. Bath weekly to keep your skin clean. \_\_\_\_\_

Q9. Name the thing that is

1. \_\_\_\_\_ Sour in taste
2. \_\_\_\_\_ rough to touch.
3. \_\_\_\_\_ bitter in taste
4. \_\_\_\_\_ soft in touch
5. \_\_\_\_\_ cold to touch

Q 10 Answer the following questions

1. What are sense organs?
  
2. How can we take care of our sense organs? Write 3 points.

### Social Science

#### Topic- The Family

Q-1 Encircle the correct answer:-

- 1 A surname is ( family name/ Father name)
- 2 Vishu learnt ( singing/ Yoga) from his grandfather.
- 3 Vishu's mother teaches( Manipuri/ Odissi) dance to the children.

4 (Drawing/ Rangoli) is the beautiful art of making beautiful designs on the floor.

**Q2 Who am I ?**

1 I am your mother's parents.

2 I am your father's parents.

3 I run a training centre for poor women

**Q-3 Match them-**

**Column A**

**Column B**

a. Parents

Father's Brother ( )

b. Paternal Uncle

Mother's Sister ( )

c. Maternal Aunt

Uncle's or aunt's children ( )

d. Cousins

Father-Mother ( )

**Q4 TRUE/ FALSE**

1. Vishu's mother loved to eat mangoes.


2. Vishu's mother lived in Lucknow.

3. It is good to sit cross-legged while eating.

**Q-5 Recognize the given pictures carefully & Write what type of family they are-**



1.



2.

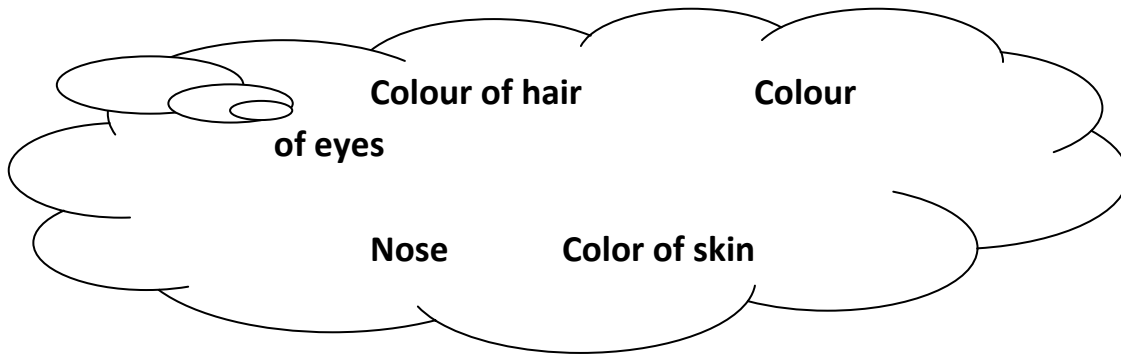
**Q6** Read the source carefully and answer the following questions:-

Vishu loves his grandparents very much. His grand mother runs a training centre to teach embroidery to women from nearby slum. She sells their goods to a handicraft centre. This helps them to earn money. His grandfather teaches yoga in the Park to make the people fit and healthy.

- 1 What does Vishu's grandmother teach to the poor women. \_\_\_\_\_
- 2 Yoga keeps the people \_\_\_\_\_ and \_\_\_\_\_.
- 3 How can you help the people in your surroundings.  
\_\_\_\_\_.

**Ch- 2 Family Similarities**

**Q1** In what ways do you resemble your family members. Encircle the correct option:-



**Q2** What do you call the twins, who look exactly alike?

Ans - \_\_\_\_\_

**Q3** To whom you resemble in your family.

Ans- \_\_\_\_\_

**Q4** Read the given source carefully and give answers of the following questions:-



Sunita Williams and her family live in United States, her relatives in Gujarat sharing their fear and relief at Sunita's journey of 195 days to space. It was a moment of great joy for them. They came out on streets and danced till daybreak, bursting crackers and beating drums.

Q1 Who is Sunita Williams?

- a) Singer      b) Dancer      c) Astronaut

Q2 In how many days Sunita completed her journey?

- a) 195 days      b) 210 days      c) 190 days

Q3 Write two ways how the relatives expressed their joy.

\_\_\_\_\_

Q5 Name the following:-

1 A state where your relatives live. \_\_\_\_\_

2 A city that you want to visit. \_\_\_\_\_

3 An occupation that you like the most. \_\_\_\_\_

4 A dish that whole family loves to eat. \_\_\_\_\_

Q6 1. Mark the state you live in.

2. Mark the state where Sunita Williams's relatives live.

Name:..... Date.....

Std.....div.....Roll No.....



© Government of India Copyright 2013.  
1. The responsibility of the correctness of internal details rests with the publisher.  
2. The territorial waters of India extend into the sea to a distance of twelve nautical miles measured from the appropriate base line.  
3. Their administrative headquarters of Chandigarh, Kavaratti and Port Blair are at Chandigarh.  
4. The boundary of Arunachal Pradesh, Assam and Meghalaya shown on this map is as interpreted from the North-Eastern Areas (Reorganisation) Act, 1971, but has yet to be verified.  
5. The External Boundary and Coast Line of India on the map agrees with the Record/Master copy certified by the Survey of India.  
6. The interstate boundaries between Uttar Pradesh-Uttarakhand, Bihar-Jharkhand and Madhya Pradesh-Chhattisgarh have not been verified by the Government concerned.

Class Teacher's Signature

**Mathematics**  
**Ch-1 Numbers up to 9,99,999**

I) Let us play with numbers:-



Roll numbers of some four children are allotted

Answer the following question:

a) Using above digits make the greatest number and smallest number.

---

b) Write the number name of the greatest number formed.

---

c) Write the expanded form of the smallest number formed in two ways:

---

---

d) What is the predecessor of the smallest number .

---

II) Fill in the blanks :

a) The numeral just before 1,000 is \_\_\_\_\_.

b) Standard form of  $9000 + 0 + 20 + 5 =$  \_\_\_\_\_.

c)  $1,938 = \underline{\quad} \times 1,000 + 9 \times \underline{\quad} + \underline{\quad} \times 10 + \underline{\quad} \times 1$

d) \_\_\_\_\_ is the numeral just after 89,999.

e) \_\_\_\_\_ is the greatest 4- digit number using digits 5,4,9,0 only once.

III) Write the number name for the following ;

a) 9,672= \_\_\_\_\_

b) 5,012= \_\_\_\_\_

c) 4,676= \_\_\_\_\_

IV) Write the following numerals in expanded form in two different ways:

a) 7904

\_\_\_\_\_  
\_\_\_\_\_  
\_\_\_\_\_

b) 5005

\_\_\_\_\_  
\_\_\_\_\_  
\_\_\_\_\_

VI) Write the numeral which is one less than the greatest 4- digit number?

\_\_\_\_\_

VII) Rewrite the set of numerals in descending order;

9,909 ; 9,900 ; 9,999 ; 9,099

\_\_\_\_\_

VIII) Write down the period ,place and place value of the digits underlined

Numerals	Place	Place Value
6,124		
5,901		
8,620		
2,891		

IX) Write the standard numerals for the following:

a)  $2000 + 100 + 0 + 1 =$  \_\_\_\_\_

b)  $300 + 0 + 8 =$  \_\_\_\_\_

c)  $9,000 + 0 + 10 + 9 =$  \_\_\_\_\_

X) Compare and put sign  $>$ ,  $<$  or  $=$

a) 8008 \_\_\_\_\_ 8080

- b) 1,201 \_\_\_\_\_ 1,011  
 c) Smallest 3-digit number \_\_\_\_\_ Greatest 3-digit number  
 d) Predecessor of 99 \_\_\_\_\_ Successor of 89

**XI) Do as directed:-**

**a) Write the predecessor of –**

- |           |                      |                                 |                      |
|-----------|----------------------|---------------------------------|----------------------|
| i) 365    | <input type="text"/> | iv) 1001                        | <input type="text"/> |
| ii) 1000  | <input type="text"/> | v) 2900                         | <input type="text"/> |
| iii) 9999 | <input type="text"/> | vi) Greatest three digit number | <input type="text"/> |

**b) Write the successor of the following:-**

- |           |                      |                              |                      |
|-----------|----------------------|------------------------------|----------------------|
| i) 4532   | <input type="text"/> | iv) 1035                     | <input type="text"/> |
| ii) 999   | <input type="text"/> | v) 2900                      | <input type="text"/> |
| iii) 9901 | <input type="text"/> | vi) smallest 4- digit number | <input type="text"/> |

**c) Write 4-digit greatest and smallest number using digits 6,8,3,0 only once :-**

i) Greatest number- \_\_\_\_\_

ii) Smallest number - \_\_\_\_\_

**d) i) Rewrite the following in descending number:-**

6010;      1006;      6001;      6100

---

ii) 729;      6234;      9870;      5254

---

**e) Write numerals for the following :-**

i) Fifty three thousand four . \_\_\_\_\_

ii) Nine hundred ninety. \_\_\_\_\_

iii) Three thousand five hundred sixty. \_\_\_\_\_

iv)  $3000 + 0 + 0 + 3$  \_\_\_\_\_

v) 9 thousand + 6 hundreds + 0 tens + 2 ones \_\_\_\_\_

f) Rahul and Ranjhi went for shopping and bought shirt and saree respectively.

Price of shirt was ₹1005 and Price of Saree was ₹1500

Answer the following questions:-

i) Which item costs more ? \_\_\_\_\_

ii) Write the number name of the cost of shirt.

\_\_\_\_\_